



SUGHAR SINGH ACADEMY (SWARN JAYANTI VIHAR)
SUMMER VACATION HOLIDAY HOMEWORK (2025-26)
CLASS-I

1.	Mathematics	<ul style="list-style-type: none">● Do the given worksheets (1 to 4) and paste in Maths -2 notebook● Do the exercises from 31 to 43 in mental maths book.● Do the page no. 14,15,16 and 17 in Rain Lily worksheets.● Practice all the exercises from ch-1 Pre number concepts to ch-5 Shapes and Patterns
2.	E.V.S	<ul style="list-style-type: none">● Do the page no.21, 22, 23, 24, 25 in Rain Lily worksheets.● Read Ch- 3 Our body and Ch-4 Looking after my body● Learn Ch-3 Our body and Ch-4 Looking after my body● Draw or paste pictures of sense organs in A4 size sheets.
3.	Computer (Project work)	<ul style="list-style-type: none">● Paste the pictures of parts of a computer on an A4 size sheet.● Read and learn Ch- 3 Parts of computer and Additional topic - Notepad
4.	English	<p>English literature -</p> <ul style="list-style-type: none">● Read Ch-2 Minto goes for a walk.● Read Poem- The furry home.● Learn Ch - 2 Minto goes for a walk.● Do pg.no. 3,4,5,6,7 in Rain Lily semester -1 worksheets. <p>English language -</p> <ul style="list-style-type: none">● Do pg.no. 2,3,4,5,6,7,8,9,10,11 in English language book.● Paste or draw pictures of naming words in A4 size sheets.● Do pg.no. 4,5,6,7,8,9,10,11,12,13 in cursive writing book.● Do the given worksheets.
5.	Hindi	<p>Literature- पाठ्य पुस्तिका में कराया गया समस्त कार्य कंठस्थ करें।</p> <p>Language- 1) रंगीन A4 शीट पर फलों के चित्र चिपकाकर उनके नाम भी लिखिए । 2) अपनी व्याकरण अभ्यास पुस्तिका में एक से दस तक गिनती शब्दों में लिखिए । 3) सुलेख पुस्तिका में पेज संख्या 1-10 तक भरिए ।</p>



SUGHAR SINGH ACADEMY (SWARN JAYANTI VIHAR)
SUMMER HOLIDAY HOMEWORK (2025-26)
SUBJECT- ENGLISH
CLASS-I

NAME: _____

DATE: _____

Worksheet- I

1. Read the naming words in the box and write under the correct category.

dog ,teacher ,computer, restaurant ,hospital.

nurse, pencil, police station , chicken

father ,ladybug , eyeglasses , barber toothbrush , America ,cow

Person- _____

_____.

Place - _____

_____.

Animals - _____









_____.

Things - _____

_____.

Worksheet- II

Unscramble the words below.

ocw		
ioln		
ebrza		
lephaten		
orhse		
igter		
hsepe		
act		

Animals

horse sheep cow zebra
elephant tiger lion cat

My Body

Rearrange the letters to find the names of Body parts

- | | | | |
|---|--------------|---|-----------|
| A | rea..... | E | gel..... |
| B | ahnd..... | F | yees..... |
| C | oens..... | G | daeh..... |
| D | infegsr..... | H | cnek..... |

Fill in the blanks

- A We can run with this part of body.....
- B Total number of fingers in one hand.....
- C Total number of toes an both legs.....
- D We can see anything with this body part.....
- E We can lift any object with this body parts.....

Draw the followings

- A Eyes
- B Ears
- C Nose
- D Hand



SUGHAR SINGH ACADEMY (SWARN JAYANTI VIHAR)
SUMMER HOLIDAY HOMEWORK (2025-26)
SUBJECT- MATHEMATICS
CLASS-I


Name:- _____

Date:- _____

1. Complete the missing numerals.

- a.
- b.

2. Count and write the total number of pictures.



3. One less than 60 is
4. One more than 99 is
5. The number between 68 and 70 is
6. One less than 81 is

7. a. $74 - \boxed{} = 70$. b. $67 = \boxed{} + 7$
- c. $30 + \boxed{} = 34$. d. $80 - \boxed{} = 74$

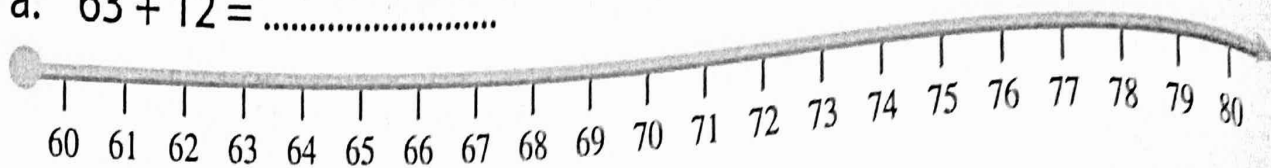
8. a. $59 = \boxed{} \text{ tens} + \boxed{} \text{ ones}$.
- b. $\boxed{} = 5 \text{ tens} + 0 \text{ ones}$.

9. a. $30 + \boxed{} = 38$ b. $\boxed{} + 10 = 20$
- c. $40 + 7 = \boxed{}$ d. $\boxed{} - 15 = 60$

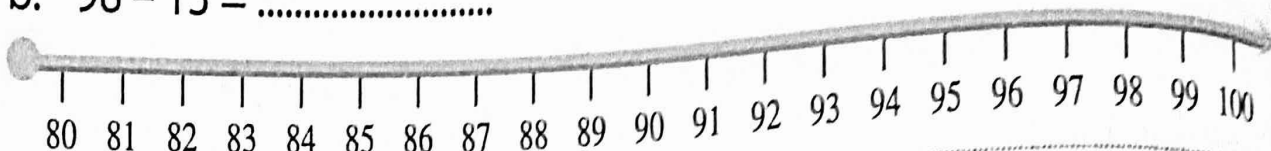
10. a. $89 - 7 = \boxed{}$ b. $79 + \boxed{} = 80$
- c. $94 - \boxed{} = 90$ d. $\boxed{} + 10 = 80$

1. Use the number line to add or subtract.


a. $63 + 12 = \dots\dots\dots$




b. $98 - 13 = \dots\dots\dots$




2. Draw beads and add together.



+




=



$24 + 12 = \dots\dots\dots$

3. Use the abacus to subtract.



$65 - 44 = \dots\dots\dots$

4. Add or subtract.

a.

	T	O
	○	○
	3	5
+	3	5
<hr/>		
<hr/>		

b.

	T	O
	○	○
	6	6
+	2	5
<hr/>		
<hr/>		

c.

	T	O
	○	○
	3	0
-	2	1
<hr/>		
<hr/>		

d.

	T	O
	○	○
	9	2
-	1	8
<hr/>		
<hr/>		

1. Encircle the greatest number.

27, 31, 13, 58, 78, 72.

2. Complete the pattern :—

- a.

6

12

18

--

--

--

--
- b.

12

15

--

21

--

27

--

3. The numeral for forty six is —

--

4. Encircle the smallest number.

35, 29, 92, 55, 87.

5. The numeral for eighteen is —

--

6. The smallest out of 10 and 100 is —

--

7. The greatest out of 28 and 46 is —

--

8. The Smallest out of 32 and 97 is —

--

9. The greatest out of 30 and 3 is —

--

10. Insert the number between 79

--

 81

11. The number name of 90 is — _____

12. The number name of 46 is — _____

Fill in the blanks :

1. 39 comes just after _____
2. 47 comes just before _____
3. 90 and 7 more make _____
4. 68 is _____ tens and _____ ones
5. Between 63 and 65 is _____
6. Smallest of 35, 72, 65 and 27 is _____
7. Largest of 56, 66, 16 and 25 is _____
8. The smallest 2-digit number, using the digits 4 and 3 (without repetition) is _____.
9. The smallest 2-digit number, using the digits 6 and 0 (without repetition) is _____.
10. The greatest 2-digit number, using the digits 3 or 4 (repetition is allowed) is _____.